

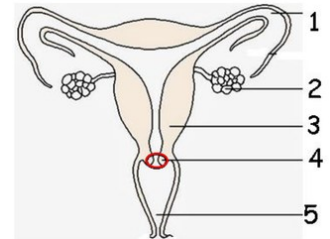
Name: _____

Date: _____

Quiz name: Reproductive Systems - Male, Female, Flowers

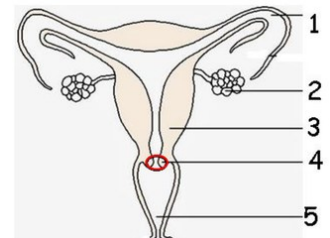
1. Fertilization occurs here

- (A) 1
- (B) 2
- (C) 3
- (D) 4
- (E) 5



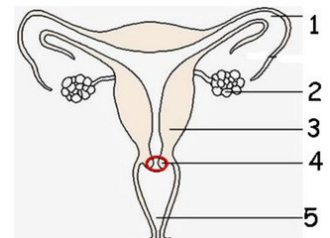
2. This structure needs to dilate (expand) in order for the baby to pass through to the birth canal

- (A) 1
- (B) 2
- (C) 3
- (D) 4
- (E) 5



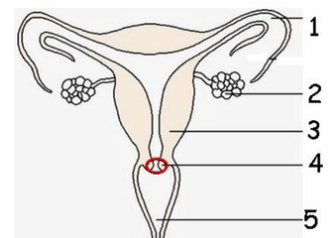
3. This structure is a target organ for the hormones estrogen and progesterone

- (A) 1
- (B) 2
- (C) 3
- (D) 4
- (E) 5



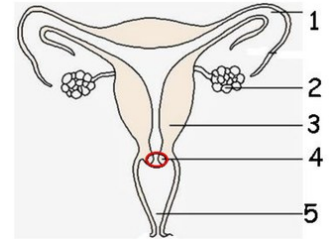
4. Meiosis occurs here

- (A) 1
- (B) 2
- (C) 3
- (D) 4
- (E) 5



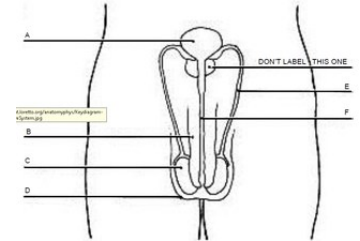
5. Structure that is the female sex organ as well as birth canal

- (A) 1
- (B) 2
- (C) 3
- (D) 4
- (E) 5



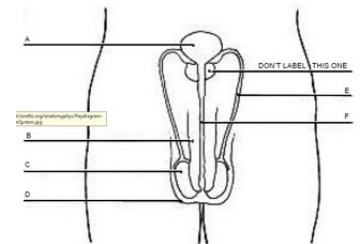
6. Meiosis occurs here

- (A) A
- (B) B
- (C) C
- (D) D
- (E) E
- (F) F



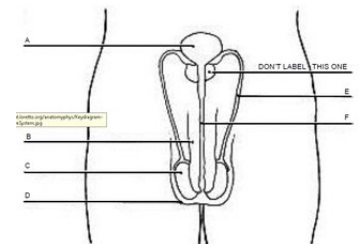
7. This is not part of the reproductive system

- (A) A
- (B) B
- (C) C
- (D) D
- (E) E
- (F) F



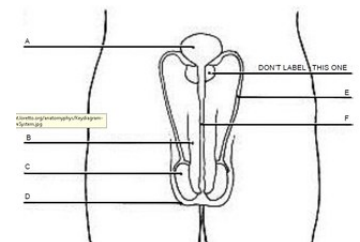
8. This helps keep the testes a few degrees cooler for optimal sperm production

- (A) A
- (B) B
- (C) C
- (D) D
- (E) E
- (F) F



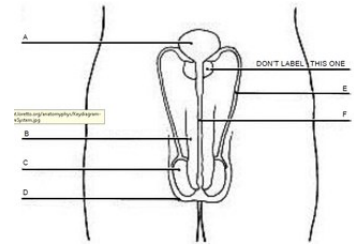
9. This structure has two roles in two systems - urinary and reproductive.

- (A) A
- (B) B
- (C) C
- (D) D
- (E) E
- (F) F



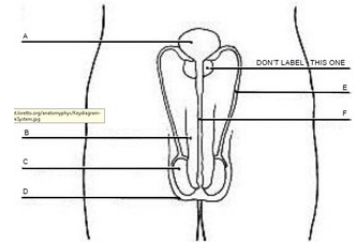
10. Location of spermatogenesis

- (A) A
- (B) B
- (C) C
- (D) D
- (E) E
- (F) F



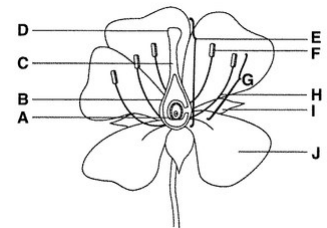
11. This structure can be snipped as a means of birth control

- (A) A
- (B) B
- (C) C
- (D) D
- (E) E
- (F) F



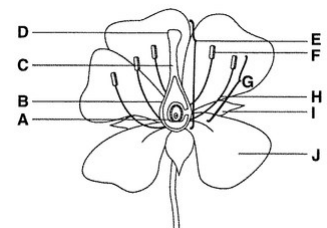
12. Meiosis occurs here

- (A) A
- (B) B
- (C) C
- (D) D
- (E) E
- (F) F
- (G) G



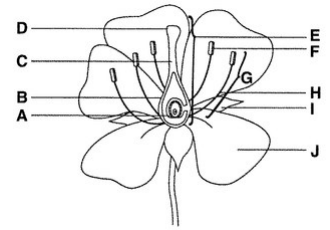
13. Female portion of the plant

- (A) A
- (B) B
- (C) C
- (D) D
- (E) E
- (F) F
- (G) G



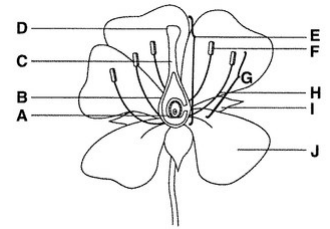
14. Sticky portion to help catch pollen

- (A) A
- (B) B
- (C) C
- (D) D
- (E) E
- (F) F
- (G) G



15. Helps to attract pollinators

- (A) A
- (B) B
- (C) C
- (D) D
- (E) E
- (F) F
- (G) G
- (H) H
- (I) I
- (J) J



16. Produces pollen

- (A) A
- (B) B
- (C) C
- (D) D
- (E) E
- (F) F
- (G) G
- (H) H
- (I) I
- (J) J

